


UNIT 1



5

Billy Beasty has _____ lions in the circus.



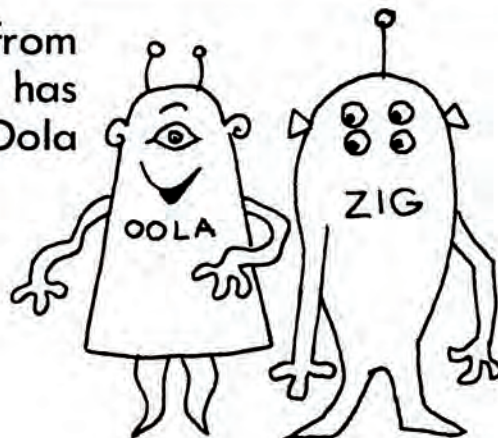
3


The Bears and the Jays are playing baseball. Molly and Fred Patterson and their father go see the game. How many Pattersons go see the game? _____

4

1


Zig and Oola are from outer space. Zig has _____ eyes and Oola has _____ eye.





9 Lorna is number 8 in line at the snack bar. The girl right after her in line is number ____.


8 Sally Bookworm is eating her way through a book, one page after the next. She has eaten pages 1, 2, 3, 4, 5, 6, and 7. She is starting to eat page? _____



There are 9 dancers trying out for a TV show. Each has been given a number from 1 to 9. They dance in the order of their numbers. Fill in the missing numbers.



4




Billy Beasty has taught Ellie Elephant to stand on step number ____.



7

Carmen and her brother are buying tickets to the fair. The tickets are sold in order. Carmen has just bought ticket number 6. Her brother is about to buy ticket number ____.



4

Helen and Eddie go to the zoo. They take the zoo train and sit in car number 5. Their friend Pepe is in the car in front of them. Pepe is in car number ____.

UNIT 2



Sally Bookworm eats while she reads. She is about to eat 4 lions and 1 tiger. How many animals is Sally about to eat? _____

$$4 + 1 = \underline{5}$$

Billy the baker made 3 cakes. He had lunch. Then he made 2 more cakes. How many cakes did Billy the baker make? _____

$$3 + 2 = \underline{5}$$

The Bears had 2 runs at the start of the second inning of the baseball game. They made 1 more run that inning. How many runs did they have at the end of the second inning? _____

$$2 + 1 = \underline{3}$$



Dave bought 1 drink and 2 cookies from the snack bar. How many things did he buy? _____

$$1 + 2 = \underline{3}$$