

How many fish do  
you see? 5



5

1

4

How many fish did  
I catch? 1



How many fish do you  
see on the line? 5



5

2

3

How many did I  
take? 2



How many fish did I  
eat? 5




5


3

2

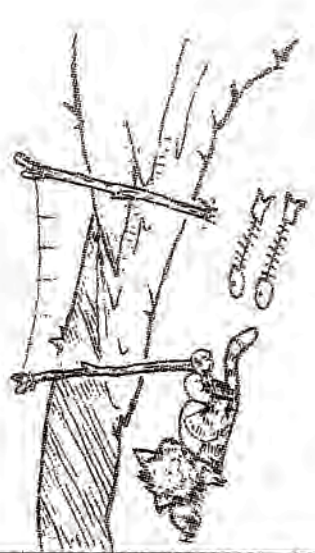
How many are left? 1



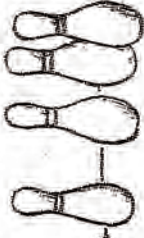
How many are left? 3



How many are left? 1



How many bowling pins do you see? 4

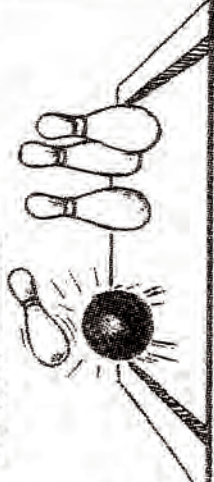


4

1

3

How many did I knock down? 1



How many bananas do I have? 2



4

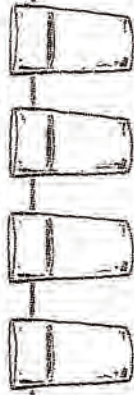
2

2

How many did I eat? 2



How many glasses of water are there? 3

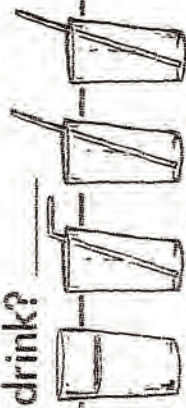


4

3

1

How many of them did I drink? 1



How many baseballs are there? 3



3

1

2

How many of them did I take? 1



How many bats do you see? 2

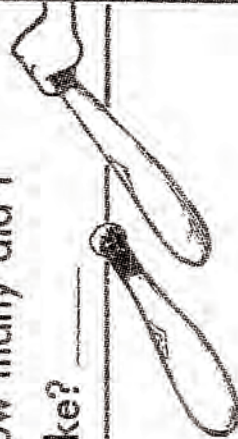


2

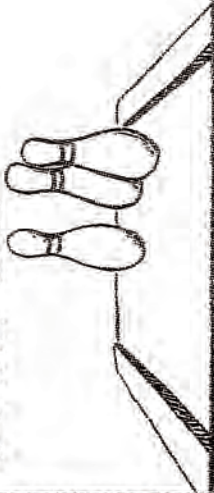
1

1

How many did I take? 1



How many bowling pins are left? 3



How many bananas do I have left? 1



How many glasses of water are left? 2



How many baseballs are left? 2



How many bats are left? 1



2



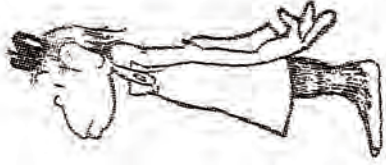
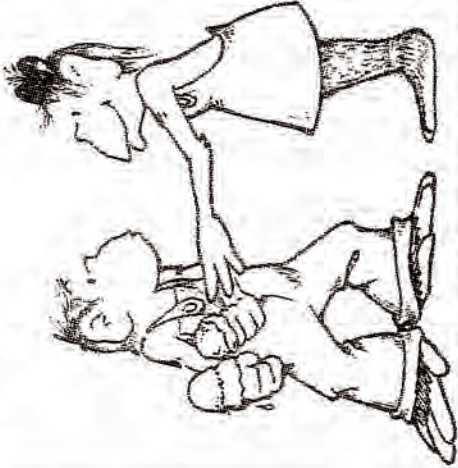
5 4 3

$5 - 0 = \underline{\quad}$

$4 - 0 = \underline{\quad}$

$3 - 0 = \underline{\quad}$

$2 - 0 = \underline{2}$



2 1 0

$2 - 0 = \underline{\quad}$

$1 - 0 = \underline{\quad}$

$0 - 0 = \underline{\quad}$



$2 - 2 = \underline{0}$



0 0 0

$5 - 5 = \underline{\quad}$

$4 - 4 = \underline{\quad}$

$3 - 3 = \underline{\quad}$

0 0 0

$2 - 2 = \underline{\quad}$

$1 - 1 = \underline{\quad}$

$0 - 0 = \underline{\quad}$


 $5 - 1 = 4$


 $5 - 4 = 1$


 $5 - 3 = 2$


 $5 - 2 = 3$


 $4 - 1 = 3$



 $4 - 3 = 1$


 $3 - 2 = 1$


 $3 - 1 = 2$


 $2 - 1 = 1$


 $1 - 1 = 0$


 $5 - 1 = 4$

$5 - 1 = 4$


 $5 - 3 = 2$

$5 - 3 = 2$


 $4 - 1 = 3$

$4 - 1 = 3$


 $3 - 2 = 1$

$3 - 2 = 1$


 $2 - 1 = 1$

$2 - 1 = 1$


 $5 - 4 = 1$

$5 - 4 = 1$


 $5 - 2 = 3$

$5 - 2 = 3$


 $4 - 3 = 1$

$4 - 3 = 1$


 $3 - 1 = 2$

$3 - 1 = 2$


 $1 - 1 = 0$

$1 - 1 = 0$